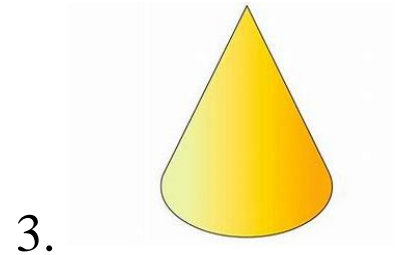




Name: \_\_\_\_\_

Date: \_\_\_\_\_




### Part A





Identify the following shapes as a flat shape or a solid shape.



### Part B




What number is above the triangle?





   Enter your answer in the space provided.

	9	14	11	2	
18					6
	8	10	5	7	

### Part C

What number is below the circle?

   Enter your answer in the space provided.

	9	14	11	2	
18					6
	8	10	5	7	

## ANSWER KEY

<b>Rubric Part A</b>	
<b>Score</b>	<b>Description</b>
<b>3</b>	Student response includes all the following components:  Each component = 1 point <ol style="list-style-type: none"> <li>1. Correct answer = solid shape</li> <li>2. Correct answer = flat shape</li> <li>3. Correct answer = solid shape</li> </ol>
<b>2</b>	Student response indicates 2 components.
<b>1</b>	Student response indicates 1 correct component.
<b>0</b>	Student response is incorrect or irrelevant.
<b>Rubric Part B</b>	
<b>Score</b>	<b>Description</b>
<b>1</b>	Student response includes the following components:  1. Computation component = 1 point <ul style="list-style-type: none"> <li>○ Correct answer, 11.</li> </ul>
<b>0</b>	Student response is incorrect or irrelevant.
<b>Rubric Part C</b>	
<b>Score</b>	<b>Description</b>
<b>1</b>	Student response includes the following components:  2. Computation component = 1 point <ul style="list-style-type: none"> <li>○ Correct answer, 7.</li> </ul>
<b>0</b>	Student response is incorrect or irrelevant.
<b>Glow</b>	<b>Grow</b>